



Quadratic Graphs and Their Properties Bell Work

Graph each quadratic function given below.


1) $y = 4x^2$



2) $y = -1.5x^2$



3) $y = x^2 - 3$



4) $y = -2x^2 + 1$

